
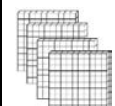




Name:

My Math Homework - 5

Date:



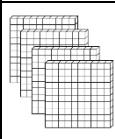


Monday	Tuesday	Wednesday	Thursday						
Complete each family of facts. 10 5 15 ____ + ____ = ____ ____ + ____ = ____ ____ - ____ = ____ ____ - ____ = ____	What is... 200 One more? ____ One less? ____ Ten more? ____ Ten less? ____	Complete each family of facts. 8 9 17 ____ + ____ = ____ ____ + ____ = ____ ____ - ____ = ____ ____ - ____ = ____	What is... 70 One more? ____ One less? ____ Ten more? ____ Ten less? ____						
Find the missing number. + 13 = 15	Find the missing number. 12 - 9 = 	Find the missing number. 10 + 7 = 	Find the missing number. - 9 = 5						
Circle the equation that is TRUE. 13 - 3 = 10 10 + 3 = 12	Find the sum. 5 + 5 + 5 = 	Circle the equation that is TRUE. 7 - 7 = 14 7 + 7 = 14	Find the sum. 11 + 3 + 1 = 						
Ann picked 8 apples and 6 pears of the trees. How many pieces of fruit does she have in all?	Kelly's story has 18 pages. She read 12 pages. How many more does she have to read?	There are 4 red markers, 7 blue markers, and 5 purple markers. How many markers are there altogether?	Ms. Smith has 18 pieces of paper. She gives out 7 to her students. How many more does she have left?						
428 ____ ones ____ tens ____ hundreds	What is the value of the 7 in 417?	Write the number. 0 ones 9 tens 3 hundreds	Draw 305 with base ten blocks.						
20 tens is the same as ____ 	Write the number. <table border="1" style="display: inline-table; vertical-align: middle;"><thead><tr><th>Hundreds</th><th>Tens</th><th>Ones</th></tr></thead><tbody><tr><td></td><td></td><td></td></tr></tbody></table>	Hundreds	Tens	Ones				Fill in the blank. 25 tens is the same as ____	400 is the same as ____ hundreds ____ tens ____ ones
Hundreds	Tens	Ones							
									
Count forward by... Fives 35, _____, _____, _____ Tens 80, _____, _____, _____	Count forward by... Tens 24, _____, _____, _____ Hundreds 101, _____, _____, _____	Count forward by... Fives 22, _____, _____, _____ Tens 73, _____, _____, _____	Count forward by... Fives 55, _____, _____, _____ Hundreds 325, _____, _____, _____						
Write the number eighty-seven in standard form. Write the number two hundred sixty-three in standard form.	Write the number seven hundred twenty in standard form. Write the number one hundred five in standard form.	Write the number 162 in word form. _____ _____ _____	Write the number 248 in word form. _____ _____ _____						

My Work

Monday	Tuesday
Wednesday	Thursday

My Progress

MONDAY	TUESDAY	WEDNESDAY	THURSDAY
# of questions _____	# of questions _____	# of questions _____	# of questions _____
# correct _____	# correct _____	# correct _____	# correct _____
I need more help with... _____	I need more help with... _____	I need more help with... _____	I need more help with... _____
_____	_____	_____	_____
_____	_____	_____	_____
_____	_____	_____	_____
_____	_____	_____	_____
_____	_____	_____	_____

Monday	Tuesday	Wednesday	Thursday						
Complete each family of facts. 10 5 15 $10 + 5 = 15$ $5 + 10 = 15$ $15 - 5 = 10$ $15 - 10 = 5$	What is... 200 One more? 201 One less? 199 Ten more? 210 Ten less? 190	Complete each family of facts. 8 9 17 $8 + 9 = 17$ $9 + 8 = 17$ $17 - 8 = 9$ $17 - 9 = 8$	What is... 70 One more? 71 One less? 69 Ten more? 80 Ten less? 60						
Find the missing number. 2 + 13 = 15	Find the missing number. 12 - 9 = 3	Find the missing number. 10 + 7 = 17	Find the missing number. 14 - 9 = 5						
Circle the equation that is TRUE. $13 - 3 = 10$ $10 + 3 = 12$	Find the sum. $5 + 5 + 5 =$ 15	Circle the equation that is TRUE. $7 - 7 = 14$ $7 + 7 = 14$	Find the sum. $11 + 3 + 1 =$ 15						
Ann picked 8 apples and 6 pears of the trees. How many pieces of fruit does she have in all? 14	Kelly's story has 18 pages. She read 12 pages. How many more does she have to read? 6	There are 4 red markers, 7 blue markers, and 5 purple markers. How many markers are there altogether? 16	Ms. Smith has 18 pieces of paper. She gives out 7 to her students. How many more does she have left? 11						
428 8 ones 2 tens 4 hundreds	What is the value of the 7 in 417? 7	Write the number. 390 0 ones 9 tens 3 hundreds	Draw 305 with base ten blocks. 						
20 tens is the same as 200 	Write the number. 400 <table border="1" style="display: inline-table; border-collapse: collapse;"> <thead> <tr> <th>Hundreds</th> <th>Tens</th> <th>Ones</th> </tr> </thead> <tbody> <tr> <td style="text-align: center;"></td> <td></td> <td></td> </tr> </tbody> </table>	Hundreds	Tens	Ones				Fill in the blank. 25 tens is the same as 250	400 is the same as 4 hundreds 0 tens 0 ones
Hundreds	Tens	Ones							
									
Count forward by... Fives 35, 40, 45, 50 Tens 80, 90, 100, 110	Count forward by... Tens 24, 34, 44, 54 Hundreds 101, 201, 301, 401	Count forward by... Fives 22, 27, 32, 37 Tens 73, 83, 93, 103	Count forward by... Fives 55, 60, 65, 70 Hundreds 325, 425, 525, 625						
Write the number eighty-seven in standard form. 87 Write the number two hundred sixty-three in standard form. 263	Write the number seven hundred twenty in standard form. 720 Write the number one hundred five in standard form. 105	Write the number 162 in word form. One hundred sixty two	Write the number 248 in word form. Two hundred forty eight						